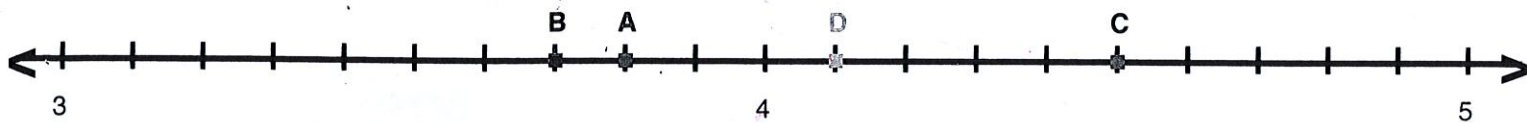


Lesson Practice:

For each number line,

1. Identify the point(s) with the decimal number they are on.
2. Write the decimal number using words.



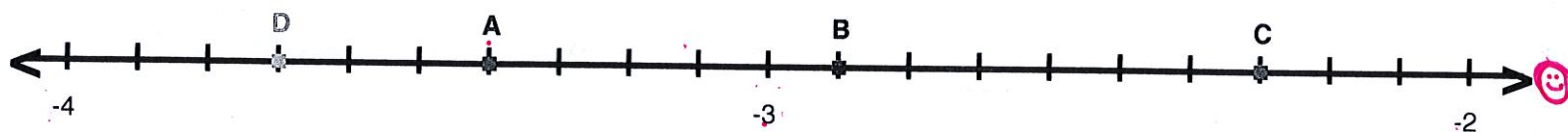
A = 3.8

B = 3.7

C = 4.5

D = 4.1

2.



A = -3.4

B = -2.9


C = -2.3

D = -3.7

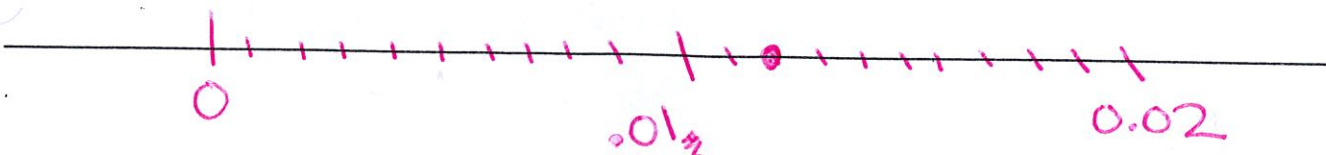
Extrema:

Draw a number line to graph the point

1.26



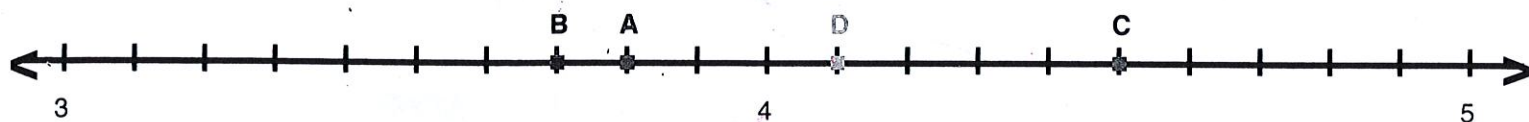
0.012



# Lesson Practice:

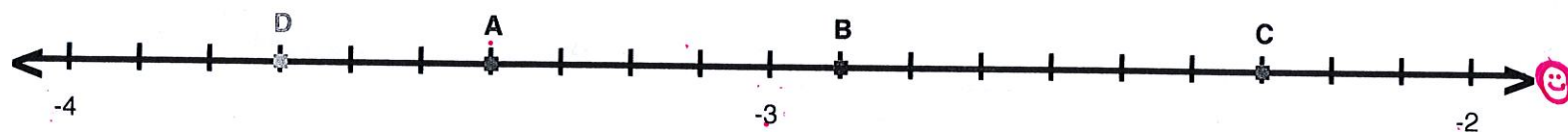
For each number line,

1. Identify the point(s) with the decimal number they are on.
2. Write the decimal number using words.



A = 3.8      B = 3.7      C = 4.5      D = 4.1

2.




A = -3.4      B = -2.9      C = -2.3      D = -3.7

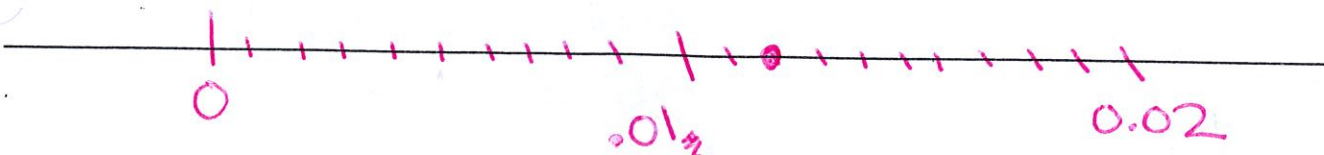
## Extrema:

Draw a number line to graph the point

1.26



0.012



Name: \_\_\_\_\_

Date: \_\_\_\_\_

Math: \_\_\_\_\_

# Reading/Writing Decimals

Handout

Directions: Write the digits of the words for each.

1. 14.007 fourteen and seven

2. Four and sixty-eight ten-thousandths  
4.0068

3. 5.715 five and seven hundred  
fifteen-thousandths

4. 231.07 two hundred thirty one  
and seven hundredths

5. Three and seven hundred two hundred-thousandths  
3.00702